

LITTLE ROCK

Math / Grade 3 / Measurement Assessment

Name _____

Teacher _____ Period _____

1. Charles and his 3 brothers compared their money. Charles has the **least** amount of money. Which of the following belongs to Charles?

A.



B.



C.



D.



2. James bought \$5.75 worth of snacks at the concession stand. He gave the clerk a \$10 bill. The clerk gave James change using the **fewest** pieces of currency possible. Which set of currency did James receive?

A.



B.



C.



D.



3. Micah has swimming lessons at 5:45 p.m. daily. Which of the following is another way to say the time Micah has swimming lessons?

- A. quarter until five
- B. quarter after five
- C. quarter until six
- D. quarter after six

4. Today is April 30th. Tomorrow is Ally's birthday. Which date is Ally's birthday?

- A. May 31st
- B. May 1st
- C. April 31st
- D. April 1st

5. Kyle's dad left for a business trip on February 27. He will be gone for 5 days. What date will Kyle's dad return home?

February						
S	M	T	W	Th	F	S
					1	2
3	4	5	6	7	8	9
10	11	12	13	14	15	16
17	18	19	20	21	22	23
24	25	26	27	28	29	


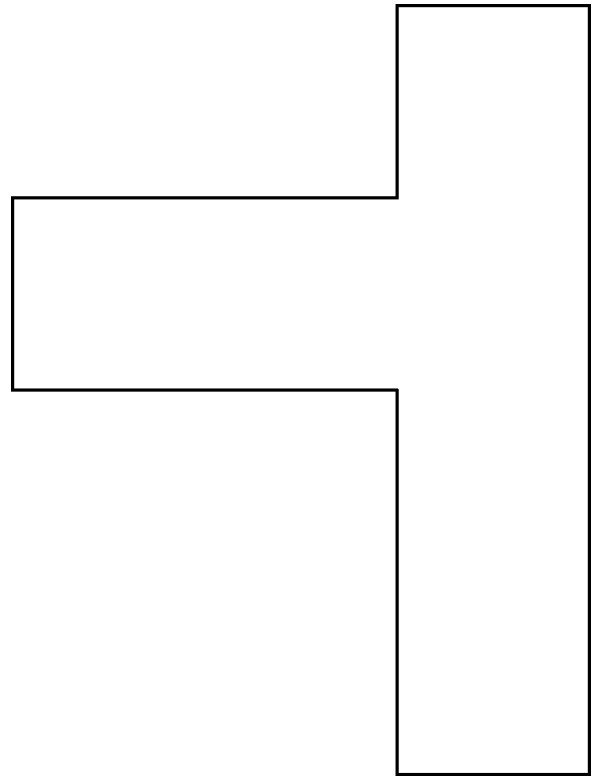
- A. February 22
- B. February 32
- C. March 3
- D. April 3

Use the reference table below to answer question 6.

U.S. Standard Measurement
12 inches = 1 foot
36 inches = 1 yard
3 feet = 1 yard
Metric Measurement
100 centimeters = 1 meter

6. Mrs. Young needs 9 feet of fabric to make a new tablecloth. The fabric is sold in yards only. How many yards will Mrs. Young need to buy?
- A. 3 yards
- B. 6 yards
- C. 9 yards
- D. 12 yards
7. Jen needs 3 yards of ribbon to make some bows for presents. How many feet of ribbon does she need?
- A. 18 feet
- B. 12 feet
- C. 9 feet
- D. 6 feet

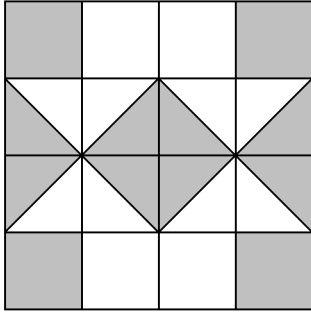
8. Carrie traced the figure below. What is the best estimate for the area of the figure?



= 1 square inch

- A. 4 square inches
- B. 5 square inches
- C. 6 square inches
- D. 7 square inches

9. What area of the square below is shaded?



- A. 4 square blocks
- B. 8 square blocks
- C. 12 square blocks
- D. 16 square blocks

LITTLE ROCK

Math / Grade 3 / Measurement Assessment

Answer Key and Alignment

<u>Answer</u>	<u>Source</u>	<u>SLE</u>	<u>CC-Standard</u>
1. C	TLI	M.13.3.6b	
2. B	TLI	M.13.3.6a	
3. C	TLI	M.13.3.3	
4. B	TLI	M.12.3.1	
5. C	TLI	M.13.3.1	
6. A	TLI	M.12.3.4a	
7. C	TLI	M.12.3.4a	
8. C	TLI	M.13.3.9b	
9. B	TLI	M.13.3.11	